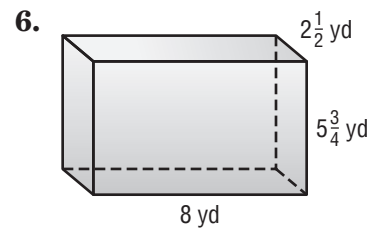
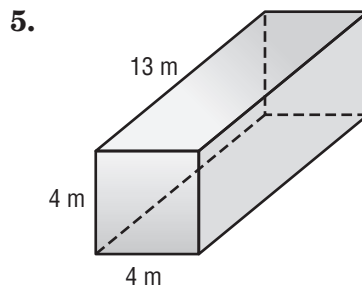
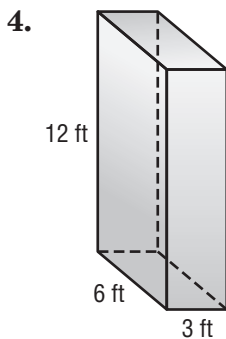
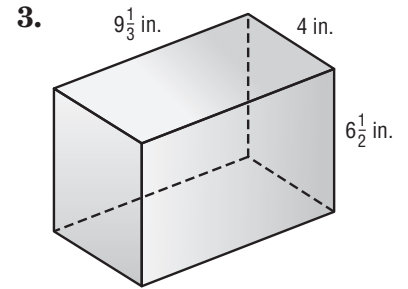
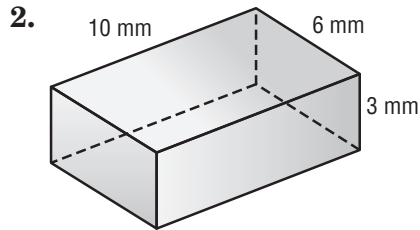
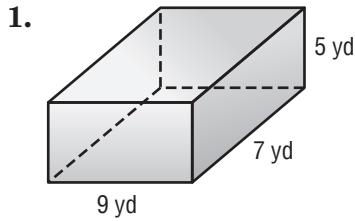


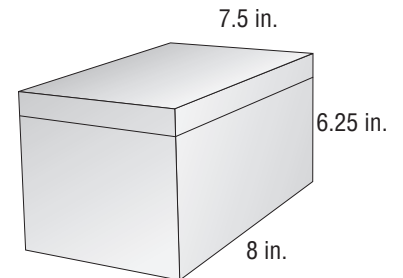
Lesson 1 Homework Practice

Volume of Rectangular Prisms

Find the volume of each prism.



7. **MUSIC** Find the volume of the CD box shown at the right.



8. **TOYS** Geneva's younger brother has a toy box that is 3.6 feet long, 2.4 feet wide, and 1.5 feet high. What is the volume of the toy box?

9. What is the volume of a rectangular prism with a length of 11 meters, width of 26 meters, and height of 38 meters?

10. **BAKING** The bread loaf pan shown is filled to a height of 2 inches with banana bread batter. How much more batter could the pan hold before it overflowed?

