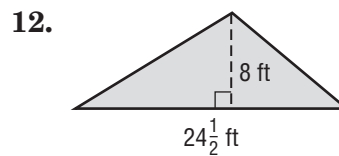
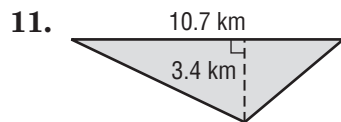
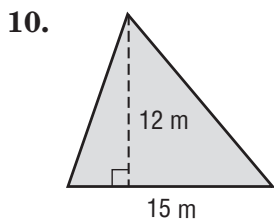
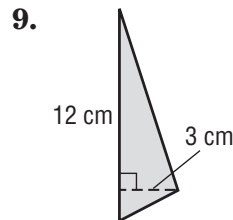
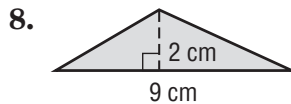
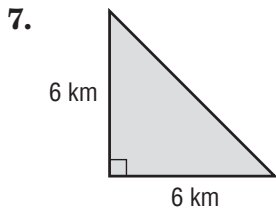
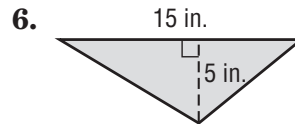
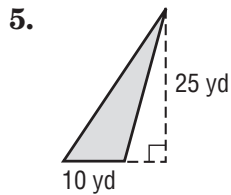
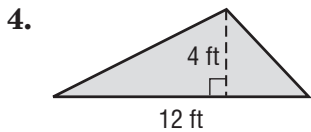
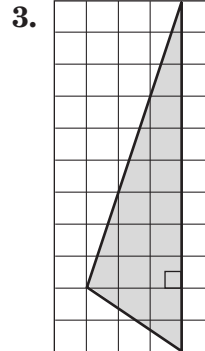
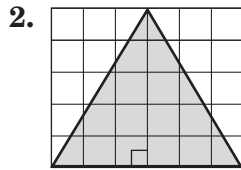
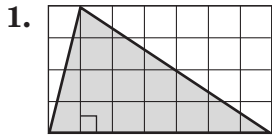


Lesson 2 Skills Practice

Area of Triangles

Find the area of each triangle.



Find the missing dimension.

13. base: 4 in.
area: 22 in²

14. height: 1 yd
area: 2.5 yd²

15. base: 5 ft
area: $5\frac{5}{6}$ ft²