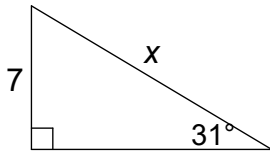
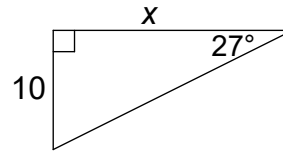


Use the Trig Table to set up a proportion. Solve for x to the nearest hundredth.

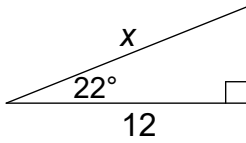
1. $x =$ _____



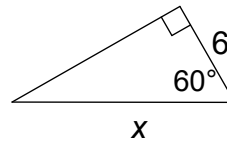
6. $x =$ _____



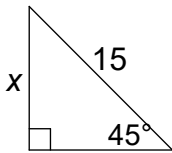
2. $x =$ _____



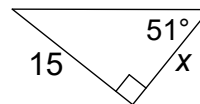
7. $x =$ _____



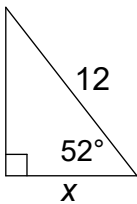
3. $x =$ _____



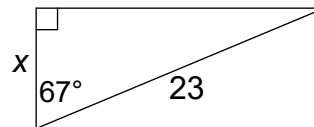
8. $x =$ _____



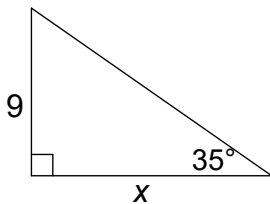
4. $x =$ _____



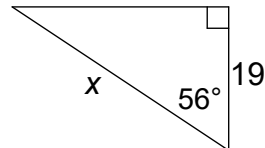
9. $x =$ _____



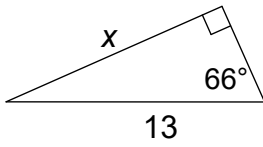
5. $x =$ _____



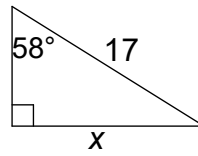
10. $x =$ _____



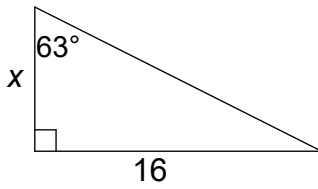
11. $x =$ _____



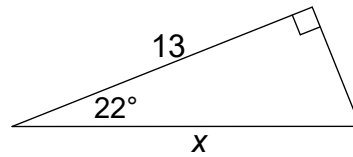
16. $x =$ _____



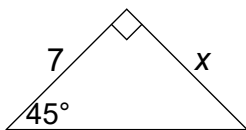
12. $x =$ _____



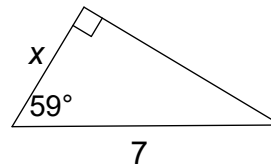
17. $x =$ _____



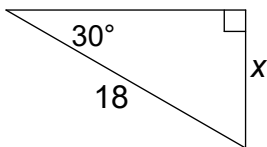
13. $x =$ _____



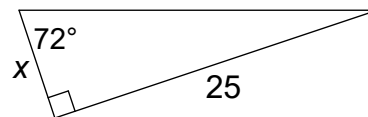
18. $x =$ _____



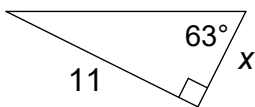
14. $x =$ _____



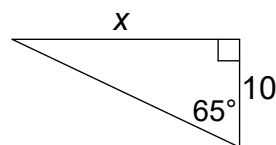
19. $x =$ _____



15. $x =$ _____



20. $x =$ _____

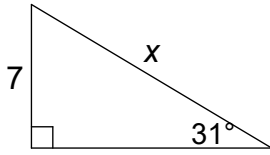


ANSWERS

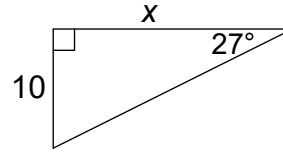
per ___ date _____

Use the Trig Table to set up a proportion. Solve for x to the nearest hundredth.

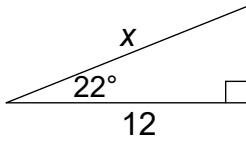
1. $x = 13.59$



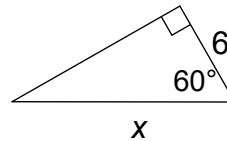
6. $x = 19.63$



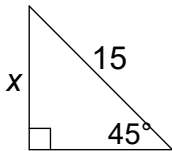
2. $x = 12.94$



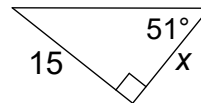
7. $x = 12$



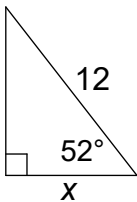
3. $x = 10.61$



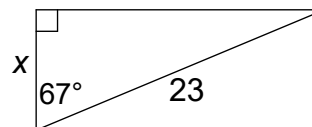
8. $x = 12.15$



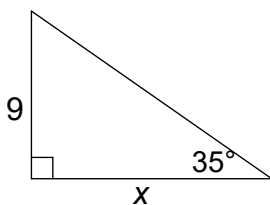
4. $x = 7.39$



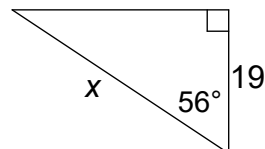
9. $x = 8.99$



5. $x = 12.85$



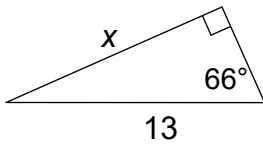
10. $x = 33.98$



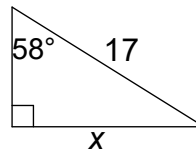
ANSWERS

per ___ date _____

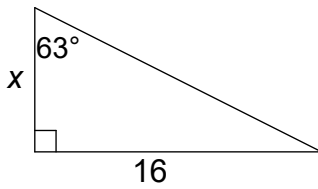
11. $x = 11.88$



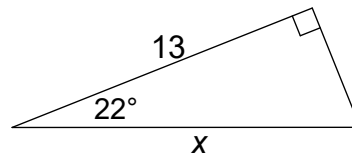
16. $x = 14.42$



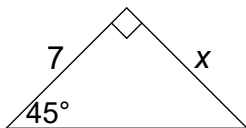
12. $x = 8.15$



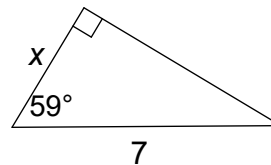
17. $x = 14.02$



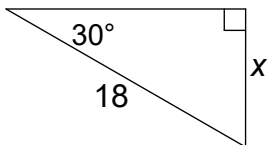
13. $x = 7$



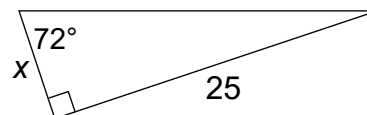
18. $x = 3.61$



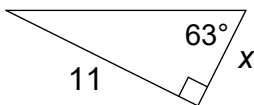
14. $x = 9$



19. $x = 8.12$



15. $x = 5.60$



20. $x = 21.45$

