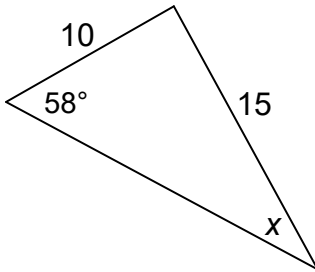


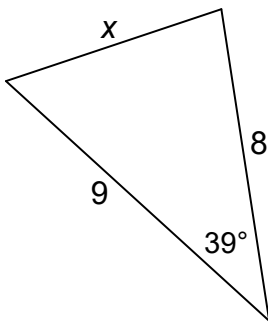
Solve for x . **Write an equation** that shows *how* you solved the problem.

Round your answers to the nearest *tenth*.

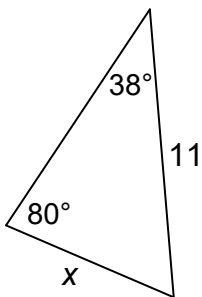
1. $x =$ _____



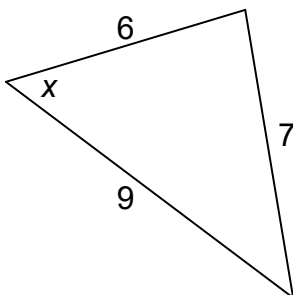
2. $x =$ _____



3. $x =$ _____



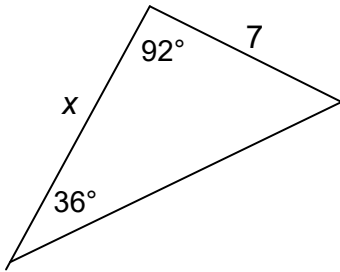
4. $x =$ _____



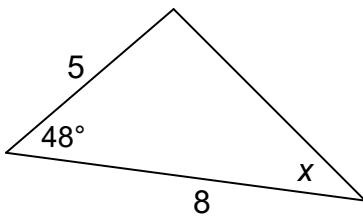
Solve for x . **Write an equation** that shows *how* you solved the problem.

Round your answers to the nearest *tenth*.

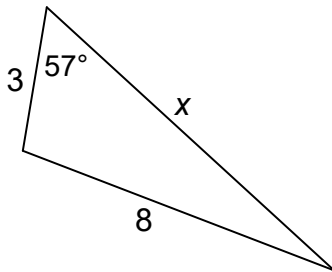
5. $x =$ _____



6. $x =$ _____



7. $x =$ _____



8. $x =$ _____

